



**MATHEMATICS  
STANDARD LEVEL  
PAPER 2**

Thursday 6 May 2010 (morning)

1 hour 30 minutes

Candidate session number

0	0							
---	---	--	--	--	--	--	--	--

**INSTRUCTIONS TO CANDIDATES**

- Write your session number in the boxes above.
- Do not open this examination paper until instructed to do so.
- A graphic display calculator is required for this paper.
- Section A: answer all of Section A in the spaces provided.
- Section B: answer all of Section B on the answer sheets provided. Write your session number on each answer sheet, and attach them to this examination paper and your cover sheet using the tag provided.
- At the end of the examination, indicate the number of sheets used in the appropriate box on your cover sheet.
- Unless otherwise stated in the question, all numerical answers must be given exactly or correct to three significant figures.







3. [Maximum mark: 5]

Jan plays a game where she tosses two fair six-sided dice. She wins a prize if the sum of her scores is 5.

(a) Jan tosses the two dice once. Find the probability that she wins a prize. [3 marks]

(b) Jan tosses the two dice 8 times. Find the probability that she wins 3 prizes. [2 marks]

.....

.....

.....

.....

.....

.....

.....

.....

.....

.....

.....

.....

.....

.....

.....

.....



4. [Maximum mark: 6]

Find the term in  $x^4$  in the expansion of  $\left(3x^2 - \frac{2}{x}\right)^5$ .

.....

.....

.....

.....

.....

.....

.....

.....

.....

.....

.....

.....

.....

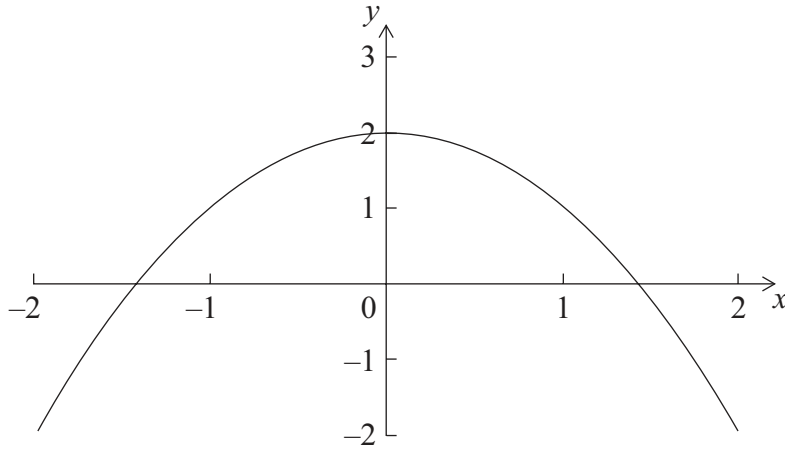
.....

.....



5. [Maximum mark: 7]

Consider  $f(x) = 2 - x^2$ , for  $-2 \leq x \leq 2$  and  $g(x) = \sin e^x$ , for  $-2 \leq x \leq 2$ . The graph of  $f$  is given below.



(a) On the diagram above, sketch the graph of  $g$ . [3 marks]

(b) Solve  $f(x) = g(x)$ . [2 marks]

(c) Write down the set of values of  $x$  such that  $f(x) > g(x)$ . [2 marks]

.....  
.....  
.....  
.....  
.....  
.....  
.....  
.....  
.....  
.....  
.....  
.....  
.....  
.....  
.....  
.....  
.....  
.....  
.....  
.....  
.....  
.....





7. [Maximum mark: 8]

The number of bacteria,  $n$ , in a dish, after  $t$  minutes is given by  $n = 800e^{0.13t}$ .

- (a) Find the value of  $n$  when  $t = 0$ . [2 marks]
- (b) Find the rate at which  $n$  is increasing when  $t = 15$ . [2 marks]
- (c) After  $k$  minutes, the rate of increase in  $n$  is greater than 10 000 bacteria per minute. Find the least value of  $k$ , where  $k \in \mathbb{Z}$ . [4 marks]

.....

.....

.....

.....

.....

.....

.....

.....

.....

.....

.....

.....

.....

.....

.....

.....

.....

.....

.....

.....

.....

.....

.....





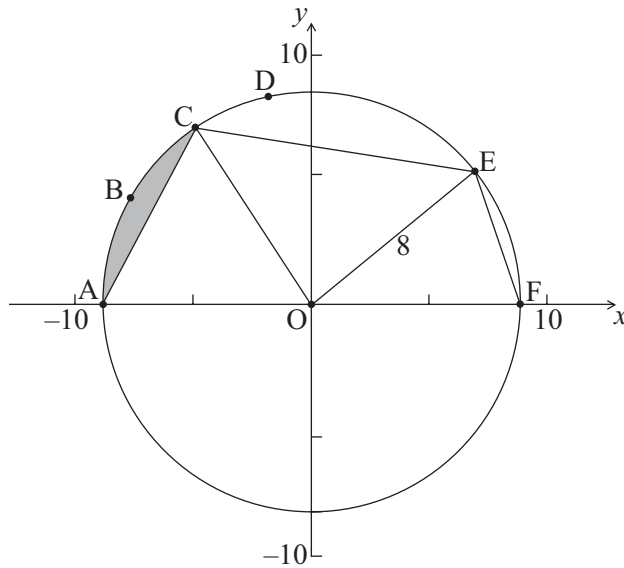
Do **NOT** write on this page.

**SECTION B**

Answer **all** the questions on the answer sheets provided. Please start each question on a new page.

8. [Maximum mark: 15]

The diagram below shows a circle with centre O and radius 8 cm.



*diagram  
not to scale*

The points A, B, C, D, E and F are on the circle, and [AF] is a diameter. The length of arc ABC is 6 cm.

- (a) Find the size of angle AOC. [2 marks]
- (b) Hence find the area of the shaded region. [6 marks]

The area of sector OCDE is 45 cm<sup>2</sup>.

- (c) Find the size of angle COE. [2 marks]
- (d) Find EF. [5 marks]



Do **NOT** write on this page.

9. [Maximum mark: 16]

In this question, distance is in metres.

Toy airplanes fly in a straight line at a constant speed. Airplane 1 passes through a point A.

Its position,  $p$  seconds after it has passed through A, is given by 
$$\begin{pmatrix} x \\ y \\ z \end{pmatrix} = \begin{pmatrix} 3 \\ -4 \\ 0 \end{pmatrix} + p \begin{pmatrix} -2 \\ 3 \\ 1 \end{pmatrix}.$$

(a) (i) Write down the coordinates of A.

(ii) Find the speed of the airplane in  $\text{ms}^{-1}$ .

[4 marks]

(b) After seven seconds the airplane passes through a point B.

(i) Find the coordinates of B.

(ii) Find the distance the airplane has travelled during the seven seconds.

[5 marks]

(c) Airplane 2 passes through a point C. Its position  $q$  seconds after it passes

through C is given by 
$$\begin{pmatrix} x \\ y \\ z \end{pmatrix} = \begin{pmatrix} 2 \\ -5 \\ 8 \end{pmatrix} + q \begin{pmatrix} -1 \\ 2 \\ a \end{pmatrix}, a \in \mathbb{R}.$$

The angle between the flight paths of Airplane 1 and Airplane 2 is  $40^\circ$ . Find the two values of  $a$ .

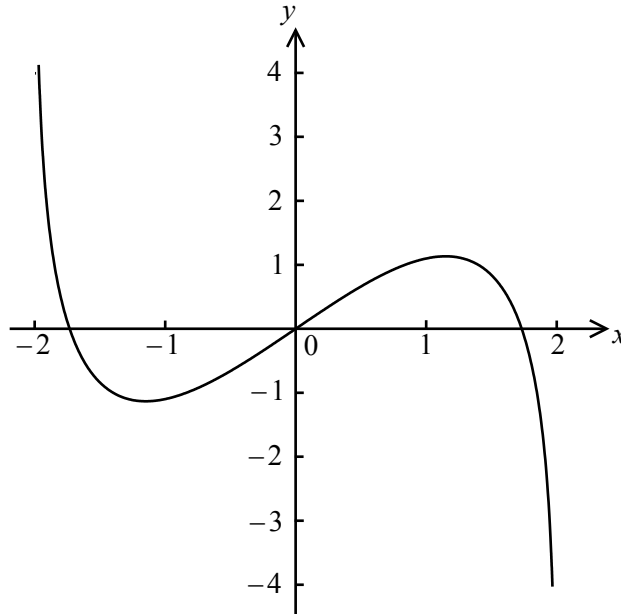
[7 marks]



Do **NOT** write on this page.

10. [Maximum mark: 14]

Consider  $f(x) = x \ln(4 - x^2)$ , for  $-2 < x < 2$ . The graph of  $f$  is given below.



(a) Let P and Q be points on the curve of  $f$  where the tangent to the graph of  $f$  is parallel to the  $x$ -axis.

(i) Find the  $x$ -coordinate of P and of Q.

(ii) Consider  $f(x) = k$ . Write down all values of  $k$  for which there are exactly two solutions.

[5 marks]

Let  $g(x) = x^3 \ln(4 - x^2)$ , for  $-2 < x < 2$ .

(b) Show that  $g'(x) = \frac{-2x^4}{4 - x^2} + 3x^2 \ln(4 - x^2)$ .

[4 marks]

(c) Sketch the graph of  $g'$ .

[2 marks]

(d) Consider  $g'(x) = w$ . Write down all values of  $w$  for which there are exactly two solutions.

[3 marks]

